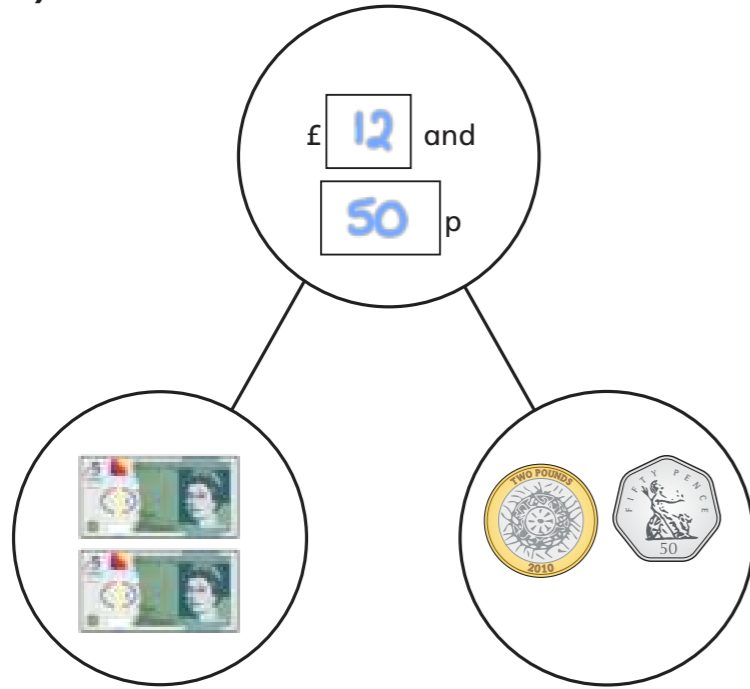


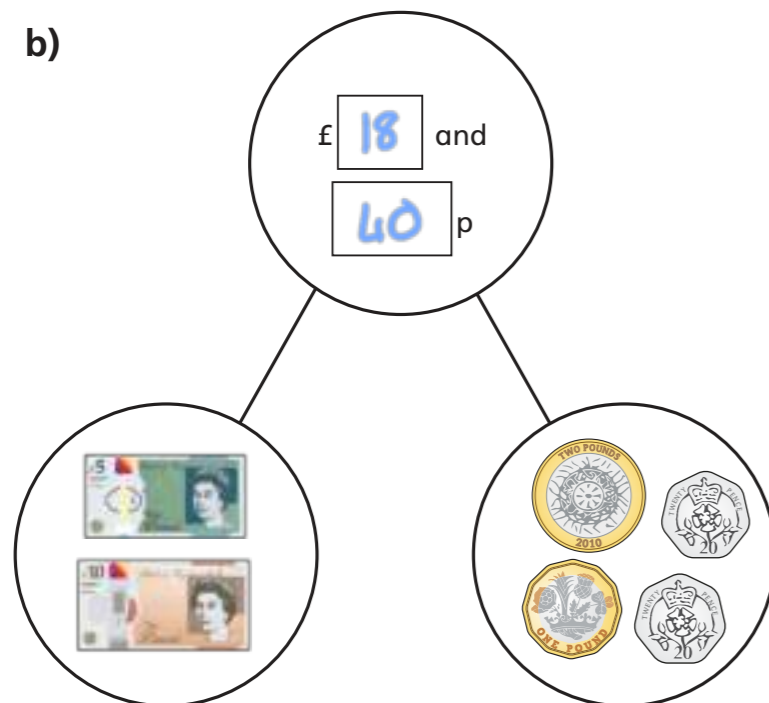
Add money

1 Complete the part-whole models.

a)



b)



2 Dora buys two birthday cards.



Complete the sentences to show how much money Dora spends.

$$£ 2 + £ 2 = £ 4$$

$$20 \text{ p} + 15 \text{ p} = 35 \text{ p}$$

Dora spends £ 4 and 35 p.

3 Complete the number sentences.

a) £3 and 12p + £5 and 12p = £ 8 and 24 p

b) £3 and 30p + £5 and 30p = £ 8 and 60 p

c) £3 and 50p + £5 and 50p = £ 9 and 0 p

d) £4 and 50p + £5 and 50p = £ 10 and 0 p


What do you notice?



- 4 Brett has £6 and 55p.
Aisha has £2 and 55p.
How much money do they have altogether?

£ and p

- 5 Annie and Alex are having pizza for lunch.

| | | |
|-----------------|------------|--|
| Tomato pizza | £5 and 40p |  |
| Vegetable pizza | £7 and 75p | |
| Potato wedges | £1 and 79p | |
| Cheese bites | £2 and 83p | |

- a) Annie orders a tomato pizza and cheese bites.
How much does it cost?

£ and p

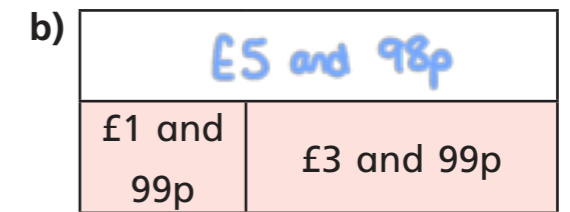
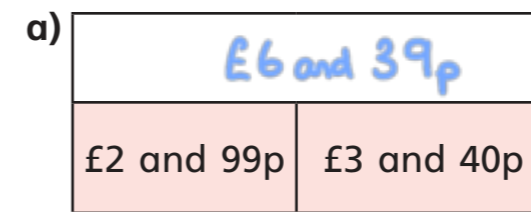
- b) Alex has £10
She wants to buy potato wedges and a vegetable pizza.
Does she have enough money? Yes
Explain your answer.

- 6 Mo buys a cap for £6 and 50p.
He also buys a key ring.
He spends £10 in total.
How much does the key ring cost?



£ and p

- 7 Complete the bar models.



- 8 Eva has £6 to spend.



What can Eva buy?

Various answers.

Compare answers with a partner.

