

Equivalent lengths – mm and cm

1 There are 10 millimetres (mm) in 1 centimetre (cm).
Use the bar models to complete the sentences.

1 cm
10 mm

a)

1 cm	1 cm	1 cm
10mm	10mm	10mm

There are mm in 3 cm.

b)

1 cm	1 cm	1 cm	1 cm	1 cm	1 cm	1 cm
10mm	10mm	10mm	10mm	10mm	10mm	10mm

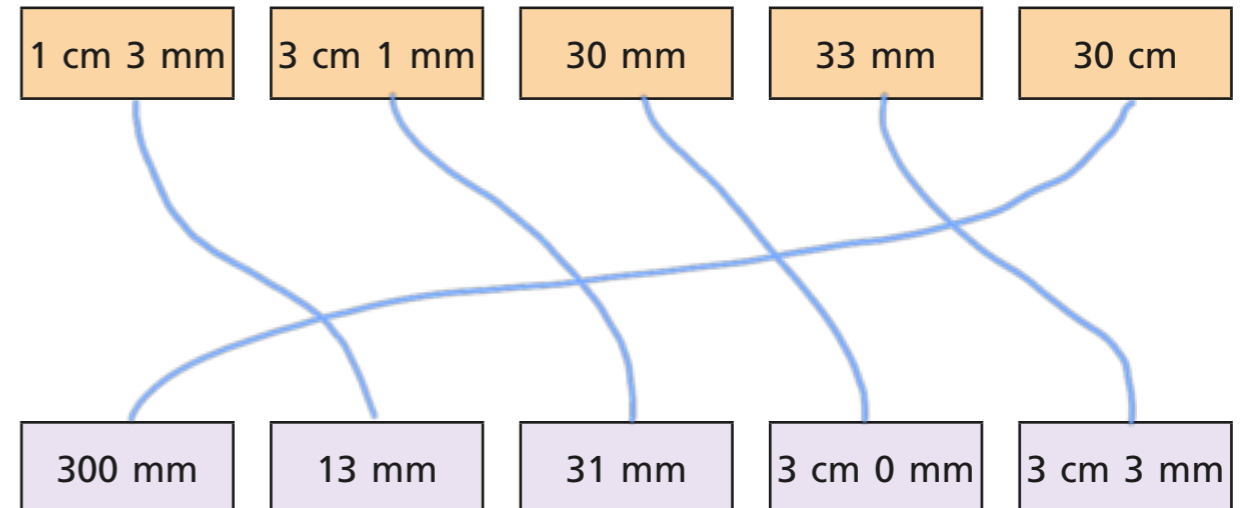
There are mm in 7 cm.

c)

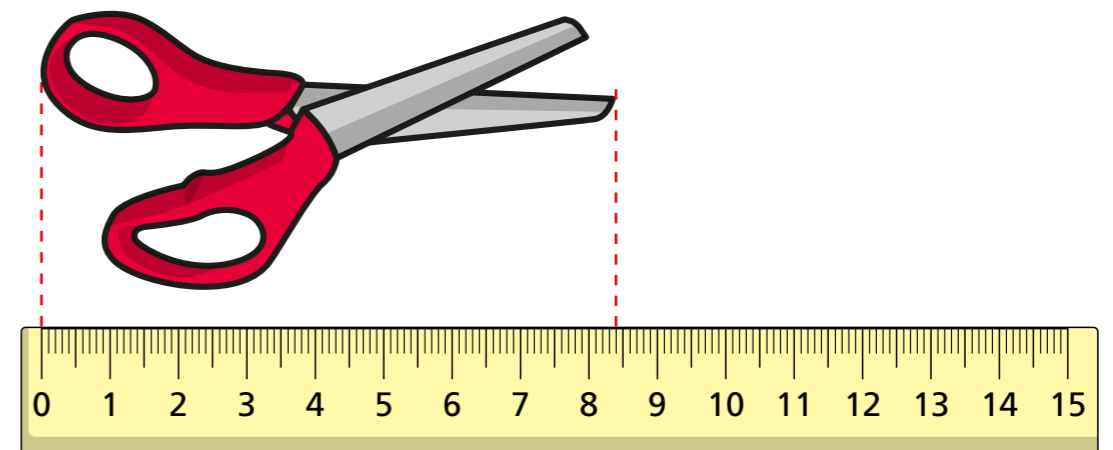
1cm	1cm	1cm	1cm
10 mm	10 mm	10 mm	10 mm

There are 40 mm in cm.

2 Match the equivalent lengths.



3 How long are the scissors?



The scissors are cm and mm long.

The scissors are mm long.




- 4 Find three items in your classroom.
Measure them and complete the table.
One has been done for you.

Item	Length in cm and mm	Length in mm
toy car	9 cm 6 mm	96 mm

- 5 Filip and Kim are building towers using cubes.
Each cube is 3 cm high.

- a) Filip uses 6 cubes.
How tall is Filip's tower?
Give your answer in millimetres.



Filip's tower is mm tall.

- b) Kim's tower is 300 mm tall.

How many cubes does she use?



Kim uses cubes.

- 6 Complete the bar models.

