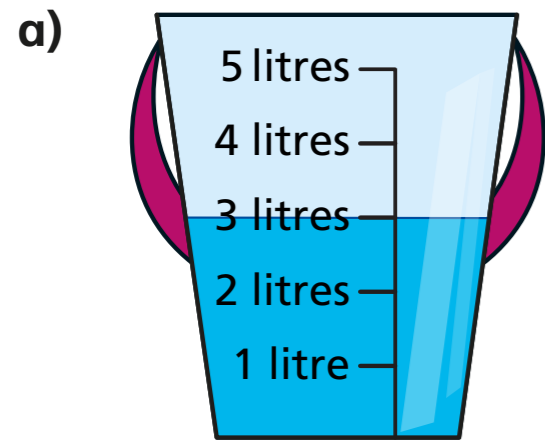
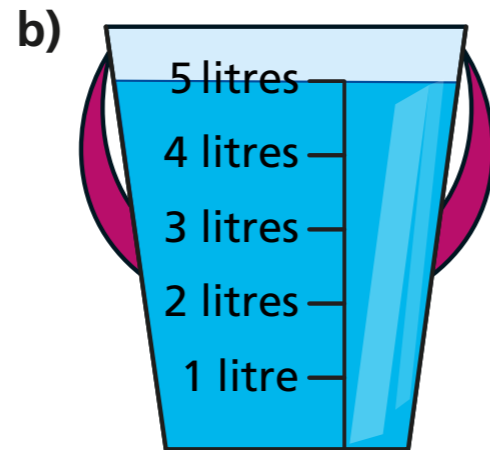


1 How much water is in each bucket?

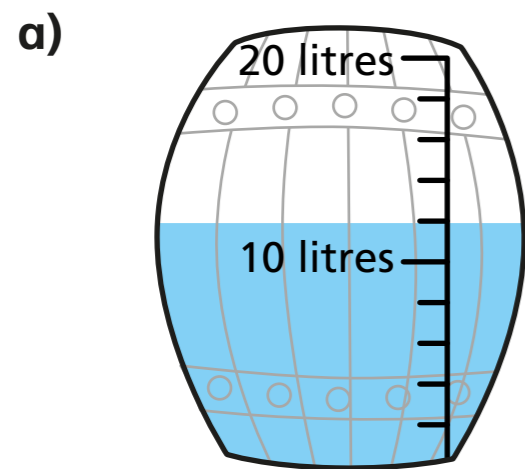


3 l

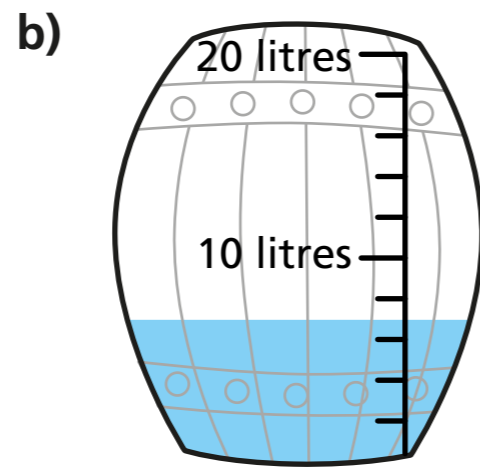


5 l

2 Each of these barrels holds 20 l.
How much water is in each barrel?



12 l



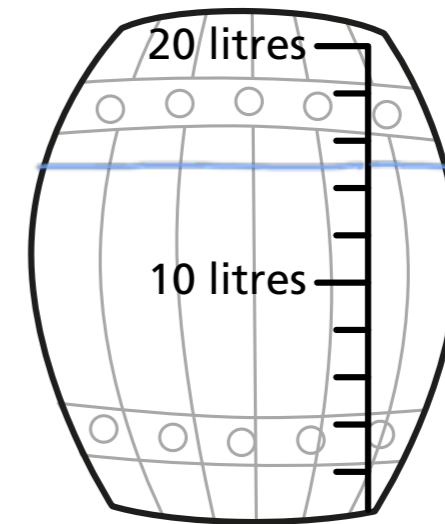
7 l

3 Tommy has 3 full buckets of water.



Each bucket contains 5 l of water.

Tommy pours all the water into the barrel.

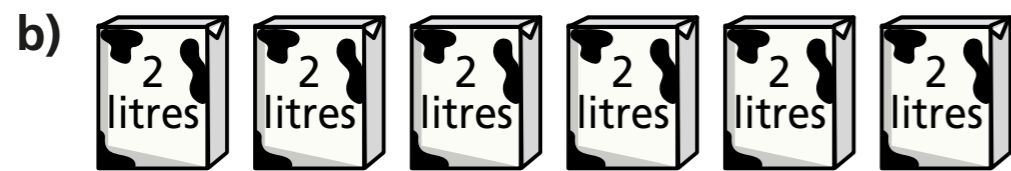


Show where the water will reach in the barrel.

4 Milk is sold in 5 l and 2 l cartons.
How much milk is there altogether?



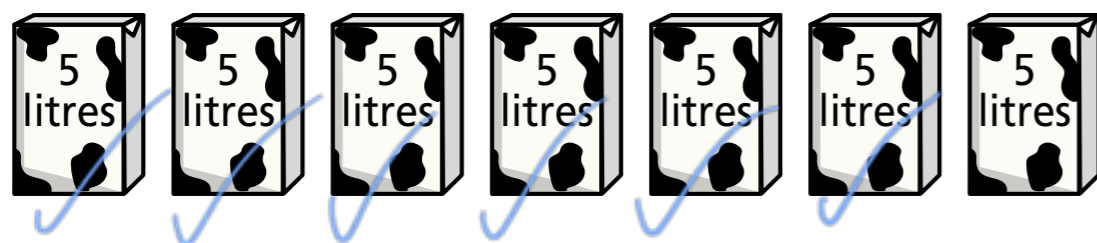
20 l



12 l


5 Tick the cartons to show 36 l of milk.

e.g.

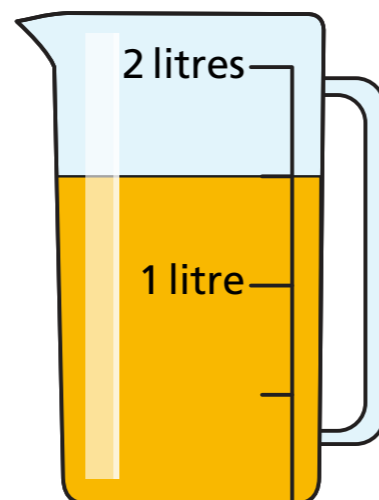


6 Eva fills a measuring jug with juice.

The jug holds 2 l when full.



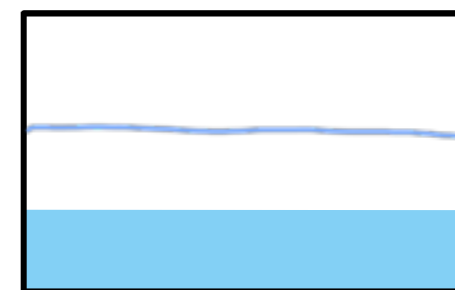
I have one and a half litres of juice.



Do you agree with Eva? yes

Explain your answer.

7 Kim puts 30 l of water into an empty fish tank.



Kim pours another 30 l into the same tank.

Draw a line on the tank to show where you think the water will come to now.

8 How would you measure the capacity of each object?

Tick litres or millilitres.

Object	Litres	Millilitres
bath	✓	
mug		✓
spoon		✓
teapot		✓
swimming pool	✓	

Talk about your answers.