

# Writing time


I Match the activity to the time it takes.



eating a sandwich



a day at school

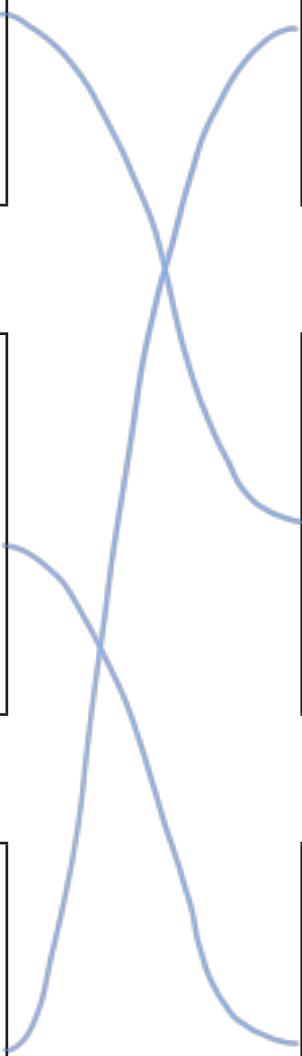


eating a grape

seconds

minutes

hours



**2** Choose a word to complete the sentences.

seconds

minutes

hours

a) The film lasted for 2 hours.

b) Break time is 20 minutes.

c) Jo can do 5 star jumps in 20 seconds.

**3** Ask a partner to use a timer.

a) How many smiley faces can you draw in 10 seconds?

Various  
answers

b) What number can you count to in 20 seconds?

Various  
answers



c) How many star jumps can you do in 1 minute?

Various  
answers






- 4 The toy train goes round the track twice in 3 minutes.



Kim

The train will go round the track more times in 1 hour because hours are longer than minutes.



Ron

The train will go round the track fewer times in 1 hour because 1 is less than 3

Who do you agree with? Kim

Talk about your answers.

