

Comparing time

1 Tick the longest time in each set.

a) 1 minute

1 second

1 hour ✓

b) 1 week

1 month ✓

1 day

2 Tick the shortest time in each set.

a) 1 minute

1 second ✓

1 hour

b) 1 week

1 month

1 day ✓

3 Write $>$, $<$ or $=$ to compare the times.

1 day $<$ 1 week


7 days $=$ 1 week

1 month $>$ 1 week




4 Three children ran a race.

Ron




65 seconds

Kim



53 seconds

Sam



60 seconds

Complete the sentences.

- a) Kim was the fastest.
- b) Ron was the slowest.
- c) Kim was faster than Sam.

5 Use a stopwatch to compare how long each activity takes.

- Counting to 10
- Writing your name 3 times.
- Building a tower of 10 cubes.

Use these words and phrases.

fastest

slowest

faster than

slower than

