

Telling the time to 5 minutes

1 Label the clock to show the number of minutes past the hour.


55 minutes, 0 minutes, 5 minutes, 50 minutes, 10 minutes, 45 minutes, 15 minutes, 40 minutes, 20 minutes, 35 minutes, 25 minutes, 30 minutes

2 Label the clock to show what time would be shown if the minute hand was pointing to each interval.


5 minutes to, 0'clock, 5 minutes past, 10 minutes to, 10 minutes past, 15 minutes to, 15 minutes past, 20 minutes to, 20 minutes past, 25 minutes to, 25 minutes past, 30 minutes past

Is there more than one possible answer for each label?

3



The hour hand is pointing just after 5 and the minute hand is pointing to 2, so the time is 2 minutes past 5



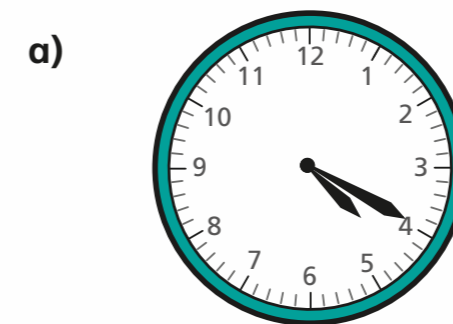
What mistake has Ron made?

The minute hand pointing to 2 means it is 10 minutes past not 2 minutes past.

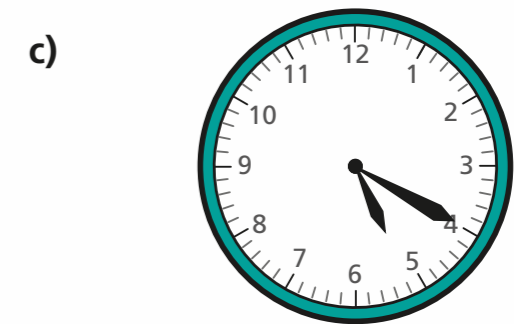
What time is it? 10 minutes past 5

4

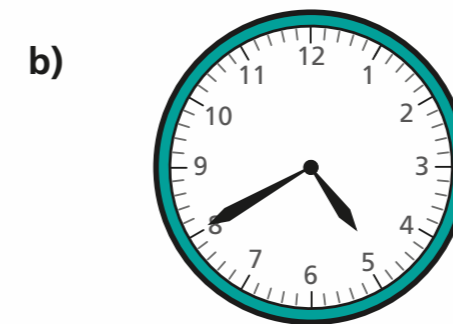
What time is shown on each clock?



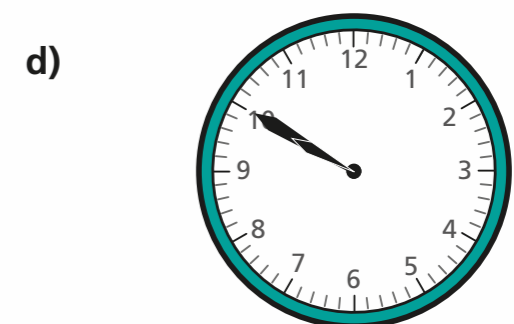
20 minutes past 4



20 minutes past 5



20 minutes to 5

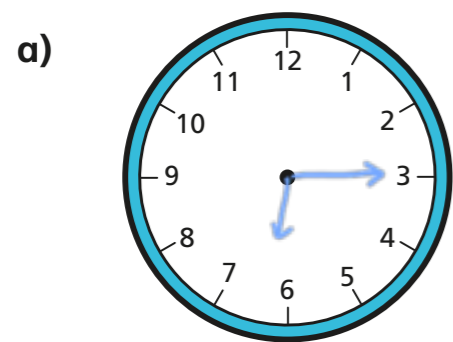


10 minutes to 10

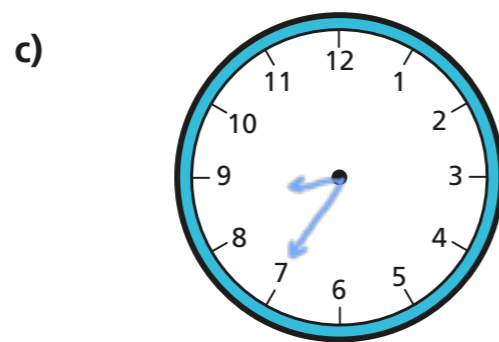




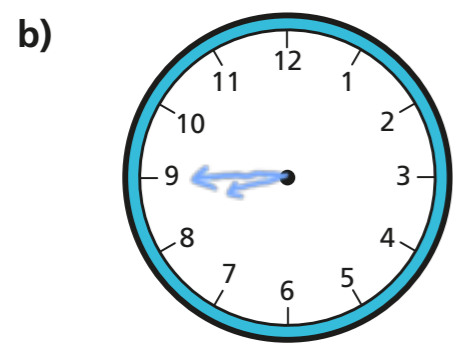
5 Draw the hands on the clocks to show the correct times.



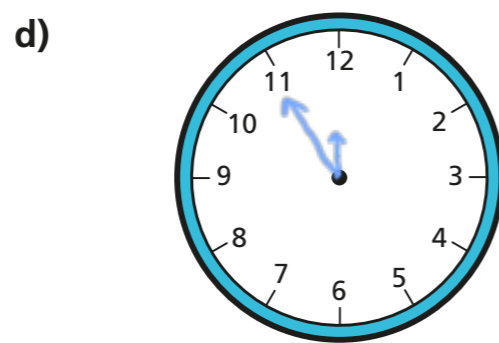
15 minutes past 6



25 minutes to 9

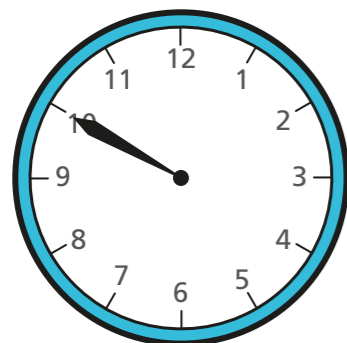


15 minutes to 9



5 minutes to 12

6 Jack wants to tell the time, but the hour hand has fallen off the clock.



There are 12 different possible times it could be during a full day.



Do you agree with Jack? No

Talk about it with a partner.



7 The minute hand and the hour hand of a clock are both pointing to an even number.

It is before midday. What times could it be?

Give three possible answers.

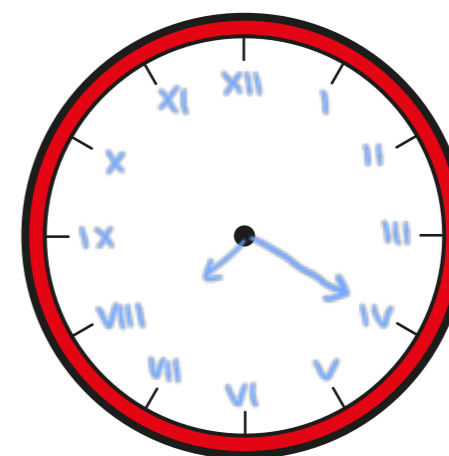
e.g. 6 o'clock 8 o'clock 10 o'clock

Compare answers with a partner. Can you find any more?

8 The numbers of the clock face were written in Roman numerals but they have been rubbed off.

The current time has a V in the hour and a V in the minutes.

e.g.



What time could it be? Draw your answer on the clock.

Are there any other answers?

various answers

Talk about it with a partner.

