

Recognising coins



I Match the coin to the amount.



20 pence



5 pence



10 pence



1 pound



1 pence



50 pence



2 pence





2 pounds

2

Here are some coins.




Complete the sentences.

There are 1p coins.There are 2p coins.There is 5p coin.There are 10p coins.There are 20p coins.**3**Write $<$ or $>$ to compare the amounts.**a)****b)**



4 Mo has one coin in his hand.

I have more than 2 pence,
but less than 1 pound.



Draw Mo's coin.

What is the value of Mo's coin?

Is there more than one answer?

