

Counting in coins



I How much money is there?

a)

<input type="text"/> p	<input type="text"/> p	<input type="text"/> p	<input type="text"/> p

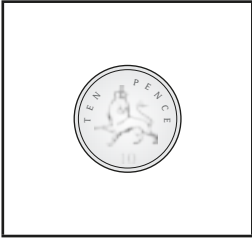



b)

<input type="text"/> p	<input type="text"/> p	<input type="text"/> p	<input type="text"/> p

c)

<input type="text"/> p	<input type="text"/> p	<input type="text"/> p	<input type="text"/> p


d)

			
<input type="text"/>	<input type="text"/>	<input type="text"/>	<input type="text"/>

p p p p

2 How much money is there?

a)

	<input type="text"/>
---	----------------------

p

b)

	<input type="text"/>
---	----------------------

p



c)

	<input type="text"/>
--	----------------------


p

3 Write $<$, $>$ or $=$ to compare the amounts.

a)

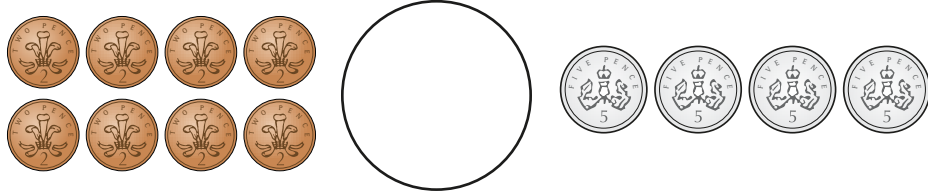
	<input type="text"/>	
---	----------------------	--

b)

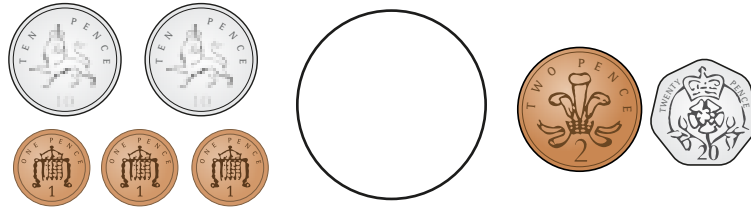
	<input type="text"/>	
---	----------------------	--



c)




d)



4

Sam has some 2p coins.



I have 11 pence.


Do you agree with Sam? _____

Talk about your answer.

5

Ron has nine 2p coins.

Jo has three silver coins.



I must have more money because I have more coins.

Ron

Do you agree with Ron? _____

Talk about your answer.