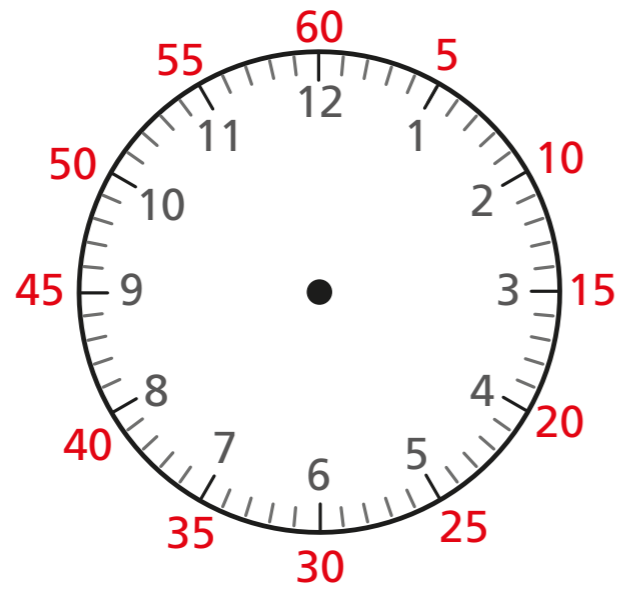


1 Complete the sentences.

You can use the clock to help you.



a) There are minutes in 1 hour.

b) There are minutes in half an hour.

c) There are minutes in quarter of an hour.

d) There are minutes in one and a half hours.


2 Complete the table.

| 60 minutes earlier | Time now | 30 minutes later |
|--------------------|----------|------------------|
| 3 o'clock | | half past 4 |
| | | |
| | | |
| | | |
| | | |
| | | |



- 3 Annie and her mum take the bus to Gran's house.

The bus ride takes one hour.




- a) What time will Annie and her mum arrive if the bus leaves at 9 o'clock?

- b) Annie and her mum get the bus home.

They get off the bus at quarter to 2
What time did they get on the bus?

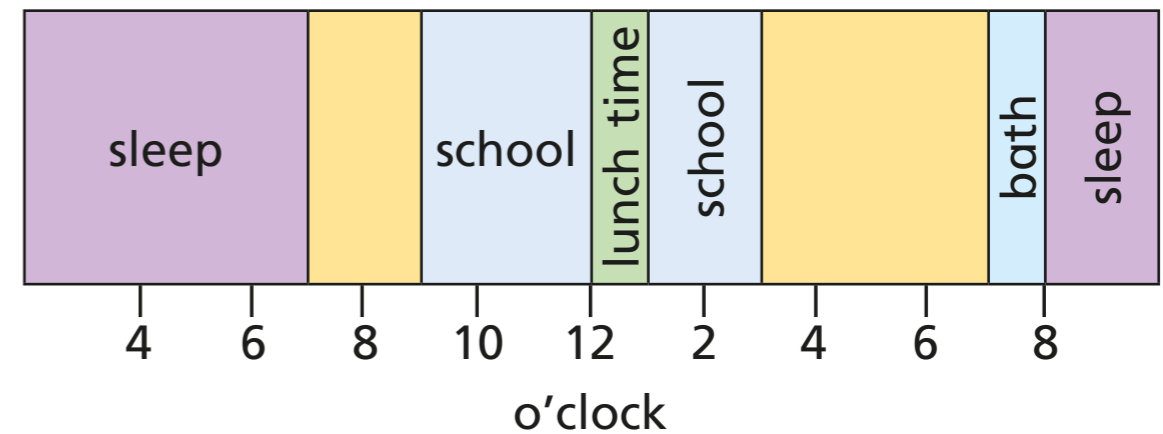
- 4 Amir went to the cinema.



The film started at half past two and lasted for 90 minutes.

What time did the film end? _____

- 5 The bar model shows a section of Dexter's day.



- a) What time did Dexter go to bed?

- b) What time did Dexter get up?

- c) What do you think Dexter did between 7 o'clock and 9 o'clock in the morning?

- d) What was Dexter doing at 6 o'clock in the morning?

- e) What could Dexter have been doing at 6 o'clock in the evening?

- 6 Work with a partner to draw a bar model showing your day.

