


Writing time

I Match the activity to the time it takes.




eating a sandwich

seconds



a day at school

minutes



eating a grape

hours

2 Choose a word to complete the sentences.

seconds

minutes

hours

a) The film lasted for 2 _____.

b) Break time is 20 _____.

c) Jo can do 5 star jumps in 20 _____.

3 Ask a partner to use a timer.

a) How many smiley faces can you draw in 10 seconds?



b) What number can you count to in 20 seconds?

c) How many star jumps can you do in 1 minute?






- 4 The toy train goes round the track twice in 3 minutes.



Kim

The train will go round the track more times in 1 hour because hours are longer than minutes.



Ron

The train will go round the track fewer times in 1 hour because 1 is less than 3

Who do you agree with? _____

Talk about your answers.

